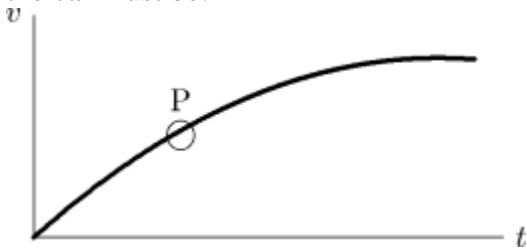


Name: _____ Date: _____

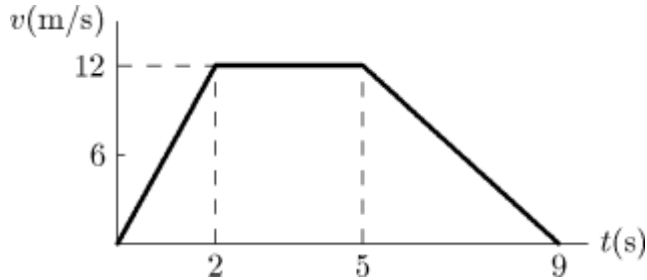
1. A car moving with an initial velocity of 25 m/s north has a constant acceleration of 3 m/s² south. After 6 seconds its velocity will be:
A) 7 m/s north
B) 7 m/s south
C) 43 m/s north
D) 20 m/s north
E) 20 m/s south
2. A car starts from rest and goes down a slope with a constant acceleration of magnitude 5 m/s². After 5 s its speed, in meters per second, is:
A) 1
B) 12.5
C) 25
D) 50
E) 160
3. The velocity of an object is given as a function of time by $\vec{v} = (4t - 3t^2)\hat{i}$, where \vec{v} is in m/s and t is in seconds. Its average velocity over the interval from $t = 0$ to $t = 2$ s:
A) is 0
B) is $(-2 \text{ m/s})\hat{i}$
C) is $(2 \text{ m/s})\hat{i}$
D) is $(-4 \text{ m/s})\hat{i}$
E) cannot be calculated unless the initial position is given
4. The diagram shows a velocity-time graph for a car moving in a straight line. At point P the car must be:



- A) moving with zero acceleration
- B) climbing the hill
- C) accelerating
- D) stationary
- E) moving at about 45° with respect to the x axis

5. A car travels 40 kilometers at an average speed of 80 km/h and then travels 40 kilometers at an average speed of 40 km/h. The average speed of the car for this 80-km trip is:
- A) 40 km/h
 - B) 45 km/h
 - C) 48 km/h
 - D) 53 km/h
 - E) 80 km/h

6. The diagram represents the straight line motion of a car. Which of the following statements is true?



- A) The car accelerates, stops, and reverses
 - B) The car accelerates at 6 m/s^2 for the first 2 s
 - C) The car is moving for a total time of 12 s
 - D) The car decelerates at 12 m/s^2 for the last 4 s
 - E) The car returns to its starting point when $t = 9$ s
7. A racing car traveling with constant acceleration increases its speed from 10 m/s to 50 m/s over a distance of 60 m. How long does this take?
- A) 2.0 s
 - B) 4.0 s
 - C) 5.0 s
 - D) 8.0 s
 - E) The time cannot be calculated since the speed is not constant
8. The coordinate-time graph of an object is a straight line with a positive slope. The object has:
- A) constant displacement
 - B) steadily increasing acceleration
 - C) steadily decreasing acceleration
 - D) constant velocity
 - E) steadily increasing velocity

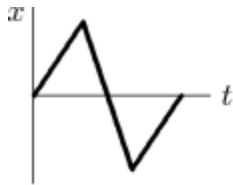
9. A particle moves along the x axis from x_1 to x_2 . Of the following values of the initial and final coordinates, which results in the displacement with the largest magnitude?

- A) $x_1 = 4 \text{ m}, x_2 = 6 \text{ m}$
- B) $x_1 = -4 \text{ m}, x_2 = -8 \text{ m}$
- C) $x_1 = -4 \text{ m}, x_2 = 2 \text{ m}$
- D) $x_1 = 4 \text{ m}, x_2 = -2 \text{ m}$
- E) $x_1 = -4 \text{ m}, x_2 = 4 \text{ m}$

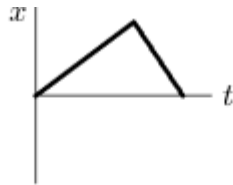
10. A particle moves along the x axis from x_1 to x_2 . Of the following values of the initial and final coordinates, which results in a displacement that is in the negative x direction?

- A) $x_1 = 4 \text{ m}, x_2 = 6 \text{ m}$
- B) $x_1 = -4 \text{ m}, x_2 = -8 \text{ m}$
- C) $x_1 = -4 \text{ m}, x_2 = 2 \text{ m}$
- D) $x_1 = -4 \text{ m}, x_2 = -2 \text{ m}$
- E) $x_1 = -4 \text{ m}, x_2 = 4 \text{ m}$

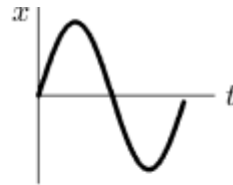
11. A car accelerates from rest on a straight road. A short time later, the car decelerates to a stop and then returns to its original position in a similar manner, by first speeding up and then slowing to a stop. Which of the following five coordinate versus time graphs best describes the motion?



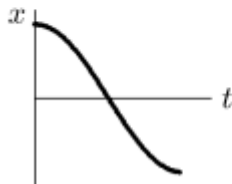
A



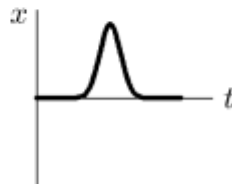
B



C



D

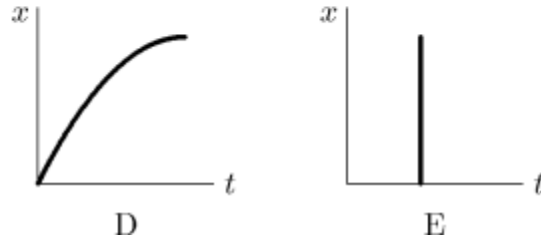
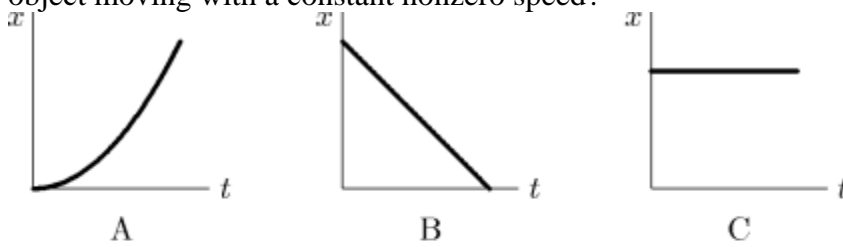


E

- A) A
- B) B
- C) C
- D) D
- E) E

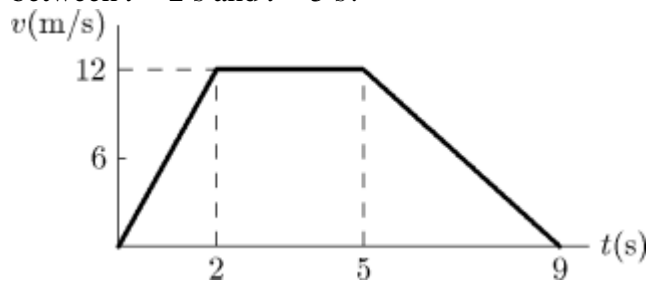
12. Throughout a time interval, while the speed of a particle increases as it moves along the x axis, its velocity and acceleration:
- A) might be in the positive and negative x directions, respectively
 - B) might be in the negative and positive x directions, respectively
 - C) might both be in the negative x direction
 - D) might be in the negative x direction and zero, respectively
 - E) might be in the positive x direction and zero, respectively
13. At time $t = 0$ a car has a velocity of $(16 \text{ m/s}) \hat{i}$. It slows down with an acceleration given by $(-0.50 \text{ m/s}^3)t \hat{i}$. By the time it stops it has traveled:
- A) 15 m
 - B) 31 m
 - C) 62 m
 - D) 85 m
 - E) 100 m
14. A car starts from Hither, goes 50 km in a straight line to Yon, immediately turns around, and returns to Hither. The time for this round trip is 2 hours. The average speed of the car for this round trip is:
- A) 0
 - B) 50 km/h
 - C) 100 km/h
 - D) 200 km/h
 - E) cannot be calculated without knowing the acceleration

15. Which of the following five coordinate versus time graphs represents the motion of an object moving with a constant nonzero speed?



- A) A
- B) B
- C) C
- D) D
- E) E

16. The graph represents the straight line motion of a car. How far does the car travel between $t = 2$ s and $t = 5$ s?



- A) 4 m
- B) 12 m
- C) 24 m
- D) 36 m
- E) 60 m

17. Over a short interval, starting at time $t = 0$, the coordinate of an automobile in meters is given by $x(t) = 27t - 4.0t^3$, where t is in seconds. The magnitudes of the initial (at $t = 0$) velocity and acceleration of the auto respectively are:
- A) 0; $(12 \text{ m/s}^2) \hat{i}$
 - B) 0; $(24 \text{ m/s}^2) \hat{i}$
 - C) $(27 \text{ m/s}) \hat{i}$; 0
 - D) $(27 \text{ m/s}) \hat{i}$; $(12 \text{ m/s}^2) \hat{i}$
 - E) $(27 \text{ m/s}) \hat{i}$; $(24 \text{ m/s}^2) \hat{i}$
18. A particle moves along the x axis according to the equation $x = 6t^2$, where x is in meters and t is in seconds. Therefore:
- A) the acceleration of the particle is $(6 \text{ m/s}^2) \hat{i}$
 - B) t cannot be negative
 - C) the particle follows a parabolic path
 - D) each second the speed of the particle changes by 9.8 m/s
 - E) none of the above
19. Two automobiles are 150 kilometers apart and traveling toward each other on a straight road. One automobile is moving at 60 km/h and the other is moving at 40 km/h mph. In how many hours will they meet?
- A) 2.5
 - B) 2.0
 - C) 1.75
 - D) 1.5
 - E) 1.25
20. Over a short interval near time $t = 0$ the coordinate of an automobile in meters is given by $x(t) = 27t - 4.0t^3$, where t is in seconds. At the end of 1.0 s the acceleration of the auto is:
- A) $(27 \text{ m/s}^2) \hat{i}$
 - B) $(4.0 \text{ m/s}^2) \hat{i}$
 - C) $(-4.0 \text{ m/s}^2) \hat{i}$
 - D) $(-12 \text{ m/s}^2) \hat{i}$
 - E) $(-24 \text{ m/s}^2) \hat{i}$

Answer Key

1. A
2. C
3. A
4. C
5. D
6. B
7. B
8. D
9. E
10. B
11. E
12. C
13. D
14. B
15. B
16. D
17. C
18. E
19. D
20. E